

Money

6. Identify the coins.



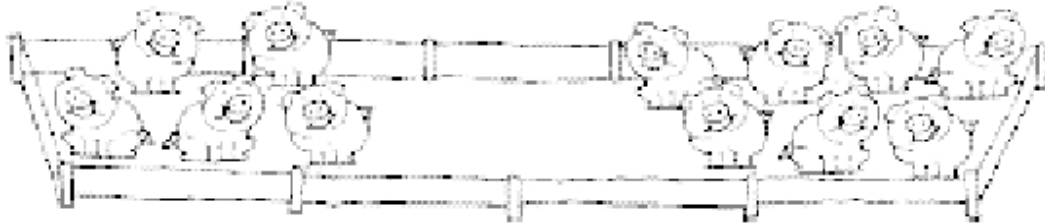
- a. penny b. dime c. nickel d. quarter



- a. penny b. dime c. nickel d. quarter

Addition and Subtraction

7. Which sentence shows how many pigs there are altogether?



- a. $7-5=2$ b. $5+7=12$ c. $5+0=5$ d. $7-0=7$

8. Which number completes the subtraction sentence?



- a. 3 b. 0 c. 4 d. 7

Measurement

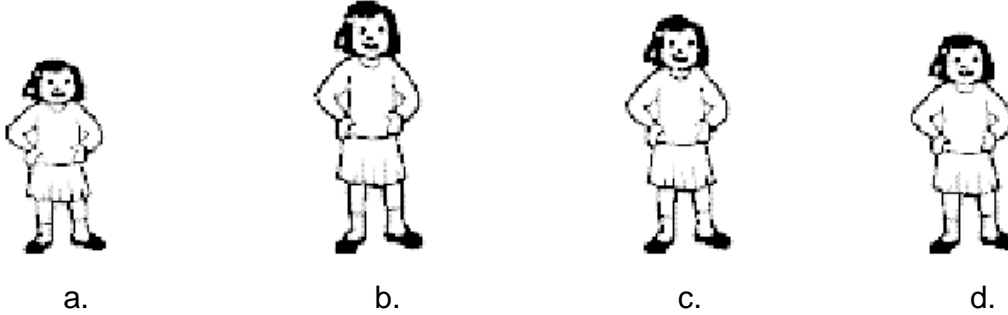
9. What day comes between Monday and Wednesday?

- a. Sunday b. Tuesday c. Thursday d. Saturday

10. What month is after September?

- a. June b. August c. October d. December

11. Which girl is the tallest?



12. How many clips long is this stick?



- a. 6 b. 10 c. 4 d. 8

Geometry

13. Which figure is a cube?



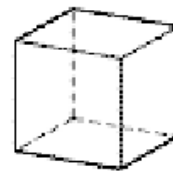
a.



b.

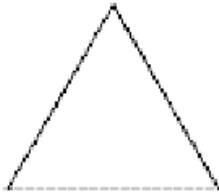


c.



d.

14. Which shape is a rectangle?



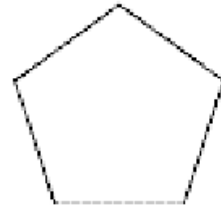
a.



b.



c.



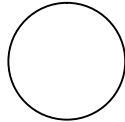
d.

15. Draw a triangle in the space below.

16. Which shape does not belong?



a.



b.



c.



d.

Data Analysis & Probability

17. Which group shows 6 tally marks?



a.



b.



c.



d.

18. Which way do the most children get to school?

How We Get to School								
School Bus								
Car								
Walk								

a. School Bus

b. Car

c. Walk

Patterns

19. Which part of the pattern comes next?



a.



b.



c.



d.